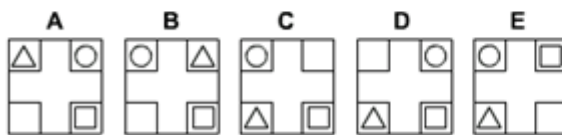
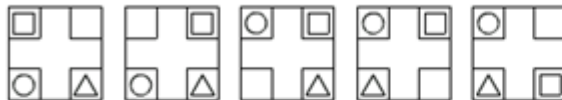


Question 1

From the options available, please choose which diagram would come next in the series. Then click on your selection below.

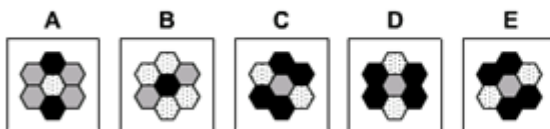
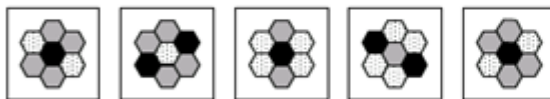
- A
- B
- C
- D
- E



Question 2

From the options available, please choose which diagram would come next in the series. Then click on your selection below.

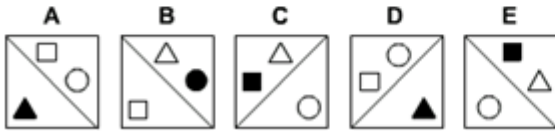
- A
- B
- C
- D
- E



Question 3

From the options available, please choose which diagram would come next in the series. Then click on your selection below.

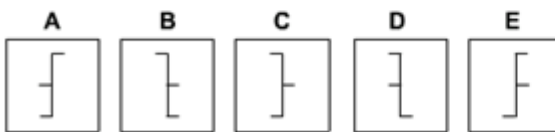
- A
- B
- C
- D
- E



Question 4

From the options available, please choose which diagram would come next in the series. Then click on your selection below.

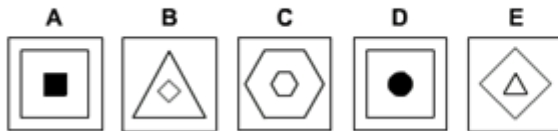
- A
- B
- C
- D
- E



Question 5

From the options available, please choose which diagram would come next in the series. Then click on your selection below.

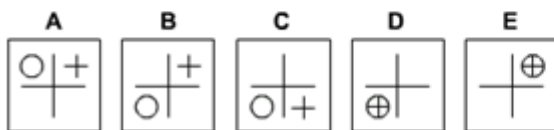
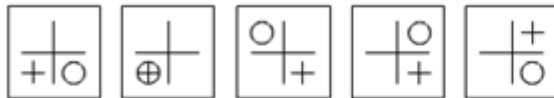
- A
- B
- C
- D
- E



Question 6

From the options available, please choose which diagram would come next in the series. Then click on your selection below.

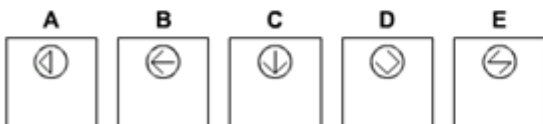
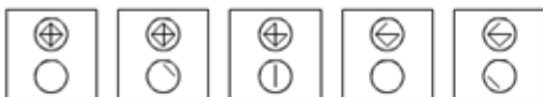
- A
- B
- C
- D
- E



Question 7

From the options available, please choose which diagram would come next in the series. Then click on your selection below.

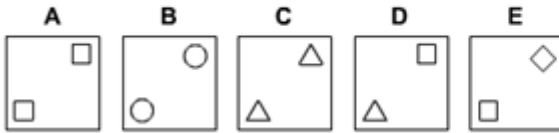
- A
- B
- C
- D
- E



Question 8

From the options available, please choose which diagram would come next in the series. Then click on your selection below.

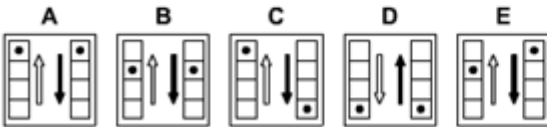
- A
- B
- C
- D
- E



Question 9

From the options available, please choose which diagram would come next in the series. Then click on your selection below.

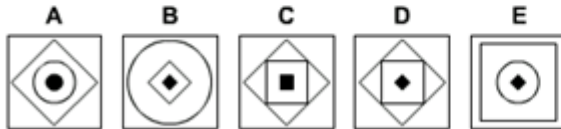
- A
- B
- C
- D
- E



Question 10

From the options available, please choose which diagram would come next in the series. Then click on your selection below.

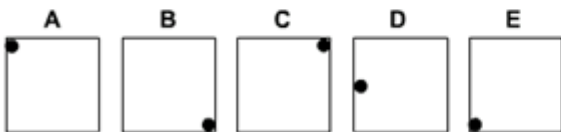
- A
- B
- C
- D
- E



Question 11

From the options available, please choose which diagram would come next in the series. Then click on your selection below.

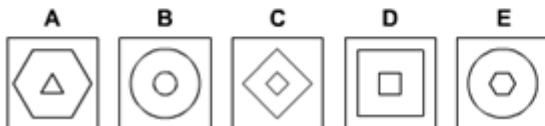
- A
- B
- C
- D
- E



Question 12

From the options available, please choose which diagram would come next in the series. Then click on your selection below.

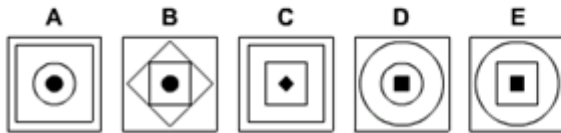
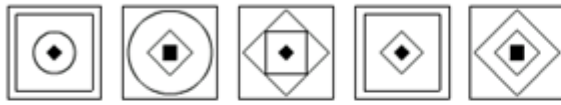
- A
- B
- C
- D
- E



Question 13

From the options available, please choose which diagram would come next in the series. Then click on your selection below.

- A
- B
- C
- D
- E



Question 14

From the options available, please choose which diagram would come next in the series. Then click on your selection below.

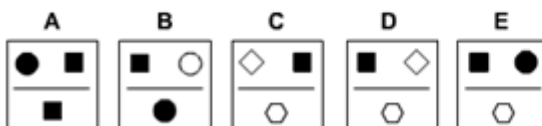
- A
- B
- C
- D
- E



Question 15

From the options available, please choose which diagram would come next in the series. Then click on your selection below.

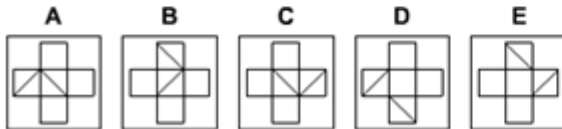
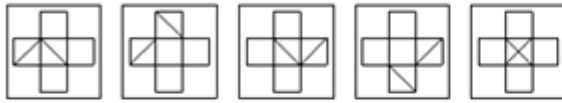
- A
- B
- C
- D
- E



Question 16

From the options available, please choose which diagram would come next in the series. Then click on your selection below.

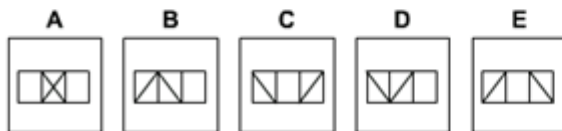
- A
- B
- C
- D
- E



Question 17

From the options available, please choose which diagram would come next in the series. Then click on your selection below.

- A
- B
- C
- D
- E



Question 18

From the options available, please choose which diagram would come next in the series. Then click on your selection below.

- A
- B
- C
- D
- E

个人答案:

1. D

2. D

3. A

4. A

5. D

6. C

7. B

8. E

9. A

10. A

11. D

12. A

13. B

14. B

15. B

16. C

17. B

18. C